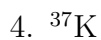

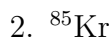



Name: _____ Period: _____

Radioactive Decay

For this worksheet, you will need to use radioactive decay mode information from the “Selected Radioisotopes” table in your chemistry reference packets.

Give the equation(s) for radioactive decay of the following:



Give the starting material for the following materials produced by radioactive decay:

