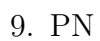
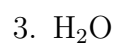
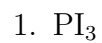


Name: _____

Block: _____

Lewis Structures #1

Draw a correct Lewis structure for each of the following compounds.



11. CH_2O

16. IBr

12. CO_2

17. CH_3OH

13. CBrClFI

18. C_2H_4

14. NF_3

19. OF_2

15. N_2H_2

20. COCl_2