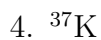

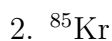



Name: _____ Block: _____

Radioactive Decay

For this worksheet, you will need to use your supplemental radioactive decay mode information and a periodic table of the elements.

Give the equation(s) for radioactive decay of the following:



Give the starting material for the following materials produced by radioactive decay:

